


# Subtracting

How tall is each bush after being cut?

$$1. \quad 82 - 18 = 64 \text{ cm}$$

1



82 cm 18 cm cut

2



73 cm 36 cm cut

3




94 cm 25 cm cut

4



65 cm 28 cm cut

5



71 cm 27 cm cut

6



63 cm 15 cm cut

7




208 cm 32 cm cut

8




183 cm 58 cm cut

9



274 cm 37 cm cut



Draw your own bush and write its height.  
Write a subtraction to cut it in half. Keep going.

Find the difference between each pair of cards.

10



11



12



13



14



15



Choose the largest and the smallest number.  
Find the difference between them.



I can use number facts and mental models to subtract 2- and 3- digit numbers